

### Sec. 4.3 Graphing Templates

Graph two cycles of  $f(x) =$

a) Ampl:

b) Refl:

c) Freq:

d) Per:




Graph two cycles of  $f(x) =$

a) Ampl:

b) Refl:

c) Freq:

d) Per:



Graph two cycles of  $f(x) =$

a) Ampl:

b) Refl:

c) Freq:

d) Per:




Graph two cycles of  $f(x) =$

a) Ampl:

b) Refl:

c) Freq:

d) Per:




Graph two cycles of  $f(x) =$

a) Ampl:

b) Refl:

c) Freq:

d) Per:



Graph two cycles of  $f(x) =$

a) Ampl:

b) Refl:

c) Freq:

d) Per:

